


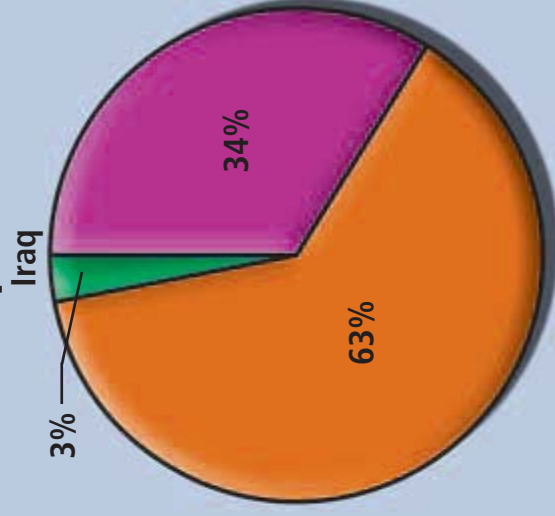
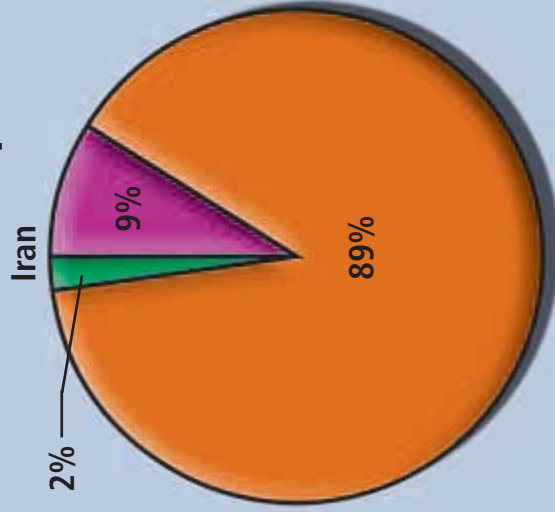
Answer—D **TEACHER TIP:** Point out that since we do not know the exact population, it is impossible to tell if more Sunnis live in Iraq; we can only know the percentage.

UNIT 6
CHAPTER 18

DAILY FOCUS SKILLS TRANSPARENCY 18-3

Interpreting a Pie Chart

Comparison of Religious Groups in Iran and Iraq



**Standardized
Test Practice**

According to the chart,

- A** Iran has more religious diversity than Iraq.
- B** more Sunnis live in Iraq than Iran.
- C** there are more Sunnis in the Middle East than Shi'a.
- D** a greater percentage of Iraq's population is Sunni.